


Would you
rather...


name _____

Color which you choose.
Give reasons why it is better.



live in an igloo

OR



live in a snow globe

Handwriting practice area with multiple sets of horizontal lines, each consisting of a solid top line, a dashed middle line, and a solid bottom line.

Inflectional Endings

Name: _____

Read the sentence. Circle the correct verb ending.

My dad <u>clean</u> _____ the house.	ed ing
They were <u>yell</u> _____ at us.	s ing
She is <u>brush</u> _____ her hair.	ed ing
He <u>ask</u> _____ me a lot of things.	s ing
He <u>feed</u> _____ the big dog.	ing s
It <u>rain</u> _____ last night.	ed ing

Inflectional Endings

Name: _____

Read the sentence. Circle the correct verb ending.

She <u>jump</u> _____ over the rock.	ed ing
Brent <u>lick</u> _____ the ice cream.	ed ing
Sam is <u>eat</u> _____ an apple.	s ing
I am <u>swing</u> _____ on the swing.	s ing
She <u>call</u> _____ me every day.	ing s
Matt keeps <u>look</u> _____ at me.	ed ing

To Spot Big Fish



I drop from the deck with a splash.

I bring fins so I can swim well.

My fins split the water as I kick.

I am swimming **through** it well.

But I cannot swim as well as fish.

With **their** fins, fish swim deep.

Pick one prayer to say two times.

Our Father, Who art in heaven, hallowed be Thy name; Thy kingdom come; Thy will be done on earth as it is in heaven. Give us this day our daily bread; and forgive us our trespasses as we forgive those who trespass against us; and lead us not into temptation, but deliver us from evil. Amen.



Hail Mary, full of grace, the Lord is with thee; blessed art thou among women and blessed is the fruit of thy womb, Jesus. Holy Mary, Mother of God, pray for us sinners, now and at the hour of our death. Amen

Glory be to the Father, and to the Son, and to the Holy Spirit. As it was in the beginning, is now, and ever shall be, world without end. Amen.

Name: _____

Freebie

Write the symbol if the number is greater or less than the other number.




1 3 is ___ than 6	2 2 is ___ than 6
3 8 is ___ than 1	4 3 is ___ than 4
5 2 is ___ than 5	6 9 is ___ than 10
7 7 is ___ than 4	8 6 is ___ than 5

Snowman Subtraction

Name _____

Directions: Cut out the numbers at the bottom of the page. Glue them in the correct spaces to finish each number sentence.

$$10 - 7 = \square$$



$$9 - \square = 6$$



$$\square - 2 = 8$$

$$8 - 3 = \square$$

$$7 - \square = 5$$



$$\square - 4 = 6$$

K.OA.A.1, K.OA.A.2, I.OA.B.4, I.OA.C.6, & I.OA.D.8 Teacher Tam 2012



2

3


3

5


8

10


10



COLOR THE SIGNS



Color the flowers according to the key.






















Key:

Greater than = Green

Less than = Blue

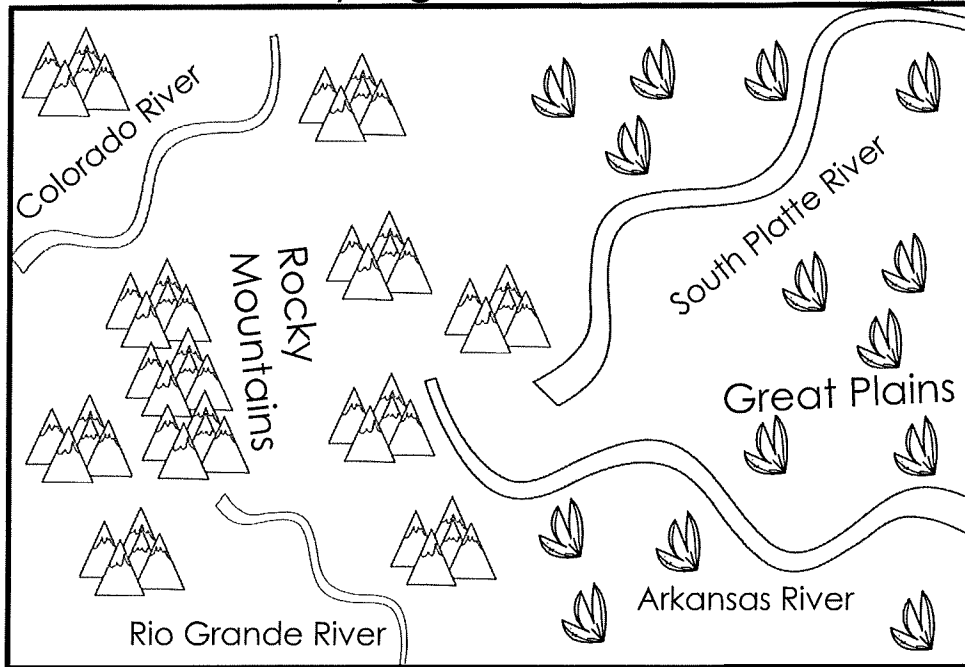

Equals = Orange



Name: _____

Map Skills

Colorado has many high mountains, and low plains.



Map Key



Mountain

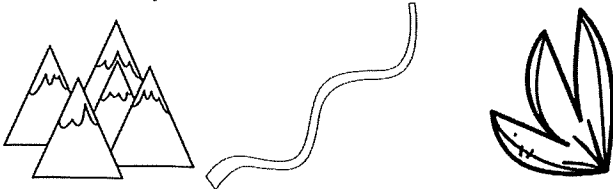


River




Plain

Which symbol stands for **river**?



Which symbol stands for **plain**?



Which symbol stands for **mountain**?



Which river is in the South?

Rio Grande South Platte River

Which river has the same name as the state?

Arkansas River Colorado River

The Great Plains are in the ____.

East West