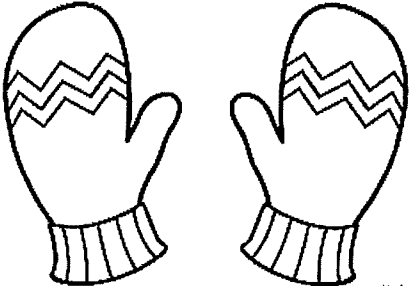



Snow  Day

Remote Work

(Day 2)

Name _____

Date _____



Great White Sharks

One of the most feared animals in the world is the shark and the shark most people are afraid of is the great white shark. It gets its name from its white belly. The top of the great white is gray which helps it blend in with the rocky bottom of the ocean. Although some fish are bigger, like the whale shark, the great white can grow up to 20 feet long. Unlike the calm, slow whale shark that feeds on tiny fish and plants, the great white is speedy and aggressive. A great white's prey includes sea lions, seals, sea turtles and rays. They use their razor sharp teeth, not to chew, but to rip their prey into small pieces. They have hundreds of teeth that can grow up to three inches long. The great white does not have many predators in the ocean except for orcas and larger sharks. Humans, however, are its biggest threat. Sharks often get caught in fishing nets or humans kill them for their fins or teeth.

1. How do great white sharks hide from predators? _____

2. Name one way a great white is different from a whale shark.

3. How are humans harmful to great white sharks? _____


Name _____

Date _____

Write 4 facts that you have learned from your reading passages.

1. _____

2. _____



3. _____

4. _____

Name: _____

Snow Fight!



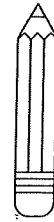
Max and Ben are playing in the snow. They see friends with sleds. Max and Ben hide. Then, they throw snowballs at their friends. Their friends are mad and cold. Their friends throw snowballs at Max and Ben. A snowball fight starts! The kids all throw many snowballs! It is a fun day in the snow!



Highlight 3 words that are related to winter. List them below.



Highlight the names of the main characters. List them below.



What can you learn from Max and Ben? How do you know this?

I can learn _____ from Max and Ben because in

the story when they surprised their friends, _____

Name _____

Eager Beaver

Color the chart to show the correct punctuation for each sentence.
Follow the path to find Kit's teacher.

	Statement	Question	Exclamation
1. Hooray, today is the first day of school	.	?	!
2. What will I wear	.	?	!
3. I hope I do not have bed head	.	?	!
4. Who will be my teacher	.	?	!
5. I have already forgotten	.	?	!
6. I will look inside my envelope	.	?	!
7. Who will be in my class	.	?	!
8. I hope I have a lot of friends this year	.	?	!
9. Uh-oh, what time is it	.	?	!
10. Teacher, are you ready for this	.	?	!

Mr. Pelt

Miss Twig

Mrs. Lodge



Writing a paragraph about: If you were a hibernating bear, what would you dream about?

Name _____

The rosary is a special prayer in honor of Mary.
Color in the beads.



Prayers of the Rosary

MAKE THE SIGN OF THE CROSS: In the name of the Father, and of the Son, and of the Holy Spirit. Amen.

THE CREED: I believe in God, the Father almighty, Creator of heaven and earth, and in Jesus Christ, his only Son, our Lord, who was conceived by the Holy Spirit, born of the Virgin Mary, suffered under Pontius Pilate, was crucified, died and was buried; he descended into hell; on the third day he rose again from the dead; he ascended into heaven, and is seated at the right hand of God the Father almighty; from there he will come to judge the living and the dead. I believe in the Holy Spirit, the holy catholic Church, the communion of saints, the forgiveness of sins, the resurrection of the body, and life everlasting. Amen.

THE OUR FATHER: Our Father, Who art in Heaven, hallowed be Thy Name. Thy kingdom come, Thy will be done on earth as it is in Heaven. Give us this day our daily bread, and forgive us our trespasses, as we forgive those who trespass against us. And lead us not into temptation, but deliver us from evil. Amen.

HAIL MARY: Hail Mary, full of grace, the Lord is with thee. Blessed art thou among women, and blessed is the fruit of thy womb, Jesus. Holy Mary, Mother of God, pray for us sinners, now and at the hour of our death. Amen.

GLORY BE: Glory be to the Father, and to the Son, and to the Holy Spirit. As it was in the beginning is now, and ever shall be, world without end. Amen.

Name _____ Date _____ Hour _____

The Almost **INCREDIBLY TRUE** **SNOW DAY** Guide

GUIDING QUESTION

The Snow Day Guide suggests flushing an ice cube for every inch. How many inches of water are in an ice cube?

MATERIALS

Ice Cubes Ruler Measuring Cup

DIRECTIONS

1. Stack the ice cubes as tall as you can. Record the height.
2. Draw a picture of your stacked ice cubes.
3. Place ice cubes in measuring cup and wait for them to melt.
4. Record the amount of water.



STEP 1

Our ice cube tower was

_____ tall.

STEP 4

The amount of water is


_____.

STEP 2


Draw a picture of your ice cube tower.



Now, go outside and use a measuring cup to scoop 1 Cup of snow. Let the snow melt. How much water is now in the measuring cup? Draw a picture of each and record your measurements.



_____ snow



_____ water

The Dinos wear gray jerseys. A jersey is a shirt with a number to identify the players when they play a game.

Directions: Read the numbers on the jerseys and use them to solve the word problems.



- Write an addition problem with the sum of 68. _____
- Write a subtraction problem with the difference of 14. _____
- Write a number sentence that tells how much more Skip's number is than Jose's. _____
- What is the total of Willie's, Chang's, and Rocco's numbers? Write a number sentence that solves this problem. _____
- Find the total of the largest number and the smallest number. Show this in a number sentence. _____
- Write a number sentence that tells how much more the largest number is than the smallest number. _____

NAME _____

SUBTRACTION # 3

1

$$\begin{array}{r} \square \\ 16 \\ - 11 \\ \hline \\ \hline \end{array}$$

2

$$\begin{array}{r} \square \\ 49 \\ - 20 \\ \hline \\ \hline \end{array}$$

3

$$\begin{array}{r} \square \\ 98 \\ - 79 \\ \hline \\ \hline \end{array}$$

4

$$\begin{array}{r} \square \\ 43 \\ - 31 \\ \hline \\ \hline \end{array}$$

5

$$\begin{array}{r} \square \\ 34 \\ - 15 \\ \hline \\ \hline \end{array}$$

6

$$\begin{array}{r} \square \\ 44 \\ - 26 \\ \hline \\ \hline \end{array}$$

7

$$\begin{array}{r} \square \\ 96 \\ - 38 \\ \hline \\ \hline \end{array}$$

8

$$\begin{array}{r} \square \\ 70 \\ - 11 \\ \hline \\ \hline \end{array}$$

9

$$\begin{array}{r} \square \\ 56 \\ - 25 \\ \hline \\ \hline \end{array}$$

10

$$\begin{array}{r} \square \\ 56 \\ - 19 \\ \hline \\ \hline \end{array}$$

11

$$\begin{array}{r} \square \\ 72 \\ - 22 \\ \hline \\ \hline \end{array}$$

12

$$\begin{array}{r} \square \\ 48 \\ - 31 \\ \hline \\ \hline \end{array}$$

13

$$\begin{array}{r} \square \\ 67 \\ - 59 \\ \hline \\ \hline \end{array}$$

14

$$\begin{array}{r} \square \\ 21 \\ - 18 \\ \hline \\ \hline \end{array}$$

15

$$\begin{array}{r} \square \\ 72 \\ - \quad 8 \\ \hline \\ \hline \end{array}$$

16

$$\begin{array}{r} \square \\ 52 \\ - 46 \\ \hline \\ \hline \end{array}$$

17

$$\begin{array}{r} \square \\ 13 \\ - 12 \\ \hline \\ \hline \end{array}$$

18

$$\begin{array}{r} \square \\ 75 \\ - 14 \\ \hline \\ \hline \end{array}$$

19

$$\begin{array}{r} \square \\ 13 \\ - \quad 9 \\ \hline \\ \hline \end{array}$$

20

$$\begin{array}{r} \square \\ 59 \\ - 40 \\ \hline \\ \hline \end{array}$$

21

$$\begin{array}{r} \square \\ 96 \\ - 18 \\ \hline \\ \hline \end{array}$$

22

$$\begin{array}{r} \square \\ 55 \\ - 39 \\ \hline \\ \hline \end{array}$$

23

$$\begin{array}{r} \square \\ 45 \\ - 35 \\ \hline \\ \hline \end{array}$$

24

$$\begin{array}{r} \square \\ 43 \\ - 41 \\ \hline \\ \hline \end{array}$$

25

$$\begin{array}{r} \square \\ 12 \\ - \quad 9 \\ \hline \\ \hline \end{array}$$