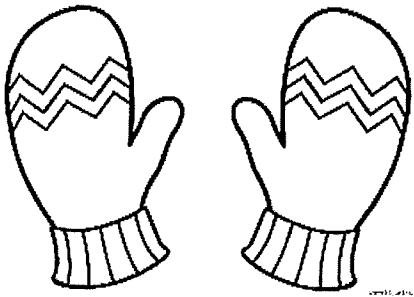


Snow  Day


Remote Work

(Day 3)

# ST. JOSEPH

While there is not a lot known about Joseph, we do know that he was the husband of Mary and the foster father of Jesus Christ. Joseph was a descendant of King David, who was the greatest king of Israel.

Joseph was visited by three angels- all through dreams. The first time the angel told him, "Don't be afraid to take Mary as your wife. The child she is carrying was conceived by the Holy Spirit. She will have a son, and you are to name him Jesus, for he will save the people from their sins." The second time an angel appeared to Joseph was in a dream after Jesus was born and the wise men had visited. The angel said to him, "Get up, take the child and his mother with you, and escape into Egypt, and stay there until I tell you, because Herod intends to search for the child and do away with him." Joseph followed both of these commands. In his last dream, the angel told Joseph it was safe to return to Nazareth.



From scripture we know that St. Joseph was a carpenter and taught the trade to Jesus. Joseph is not spoken of in scripture often, but he did appear for the last time when Jesus was 12 years old and was found in the Temple.

Theologians believe that Joseph passed away before Jesus began his public ministry, and they estimate he died in 18 CE.

Today we celebrate St. Joseph on March 19. He is the patron saint of the Universal Church, fathers, workers, travelers, and immigrants. St. Joseph's Day is also widely celebrated by Italian communities. They celebrate by decorating a table with candles and flowers and they place breads, cakes, cookies, and other meatless (because it falls during Lent) dishes on the table to share.

Name \_\_\_\_\_ Date \_\_\_\_\_

# ST. JOSEPH REVIEW

**Directions:** Circle the best choice for each question.

1.) St. Joseph is the patron saint of \_\_\_\_\_.

- a. workers
- b. teachers
- c. police officers
- d. runners

- a. March 17
- b. January 1
- c. February 3
- d. March 19

**Directions:** Read each statement and determine if it is true or false. Write T or F on the line.

3.) St. Joseph was married to Mary, the mother of Jesus. \_\_\_\_\_

4.) St. Joseph was most likely present for the public ministry of Jesus. \_\_\_\_\_

5.) St. Joseph was visited by 3 angels in dream. \_\_\_\_\_

6.) Explain how Italian communities celebrate St. Joseph's Day each March.

---

---

---

---

---



Name \_\_\_\_\_ Date \_\_\_\_\_

# ST. JOSEPH WORD SEARCH

**Directions:** Find each St. Joseph themed word in the word search below.

B	D	D	A	V	I	D	R	T	Y	U	I	O	N
C	S	Y	H	J	H	L	O	F	P	R	F	B	A
M	A	R	C	H	R	U	T	N	D	Q	A	R	Z
G	T	P	L	M	W	V	S	N	Y	D	T	Q	A
F	D	E	R	H	O	Q	H	B	N	G	H	M	R
X	R	Z	F	A	R	J	F	E	A	V	E	Z	E
V	E	R	W	E	K	B	N	M	G	N	R	L	T
J	A	K	I	Y	E	N	F	Y	J	S	D	K	H
V	M	R	Y	H	R	N	M	Y	W	E	P	Q	Z
F	G	Y	Q	O	B	Z	D	T	S	A	P	U	T
N	Y	F	D	S	U	I	J	O	S	E	P	H	P
A	N	G	E	L	G	B	D	Q	W	U	P	Z	C
B	M	H	Y	C	A	R	P	E	N	T	E	R	Y
V	T	G	S	J	I	O	V	D	E	H	Q	N	M

JOSEPH

WORKER

HUSBAND

ANGEL

MARCH

FATHER

CARPENTER

NAZARETH

DREAM

DAVID

# Homework Time

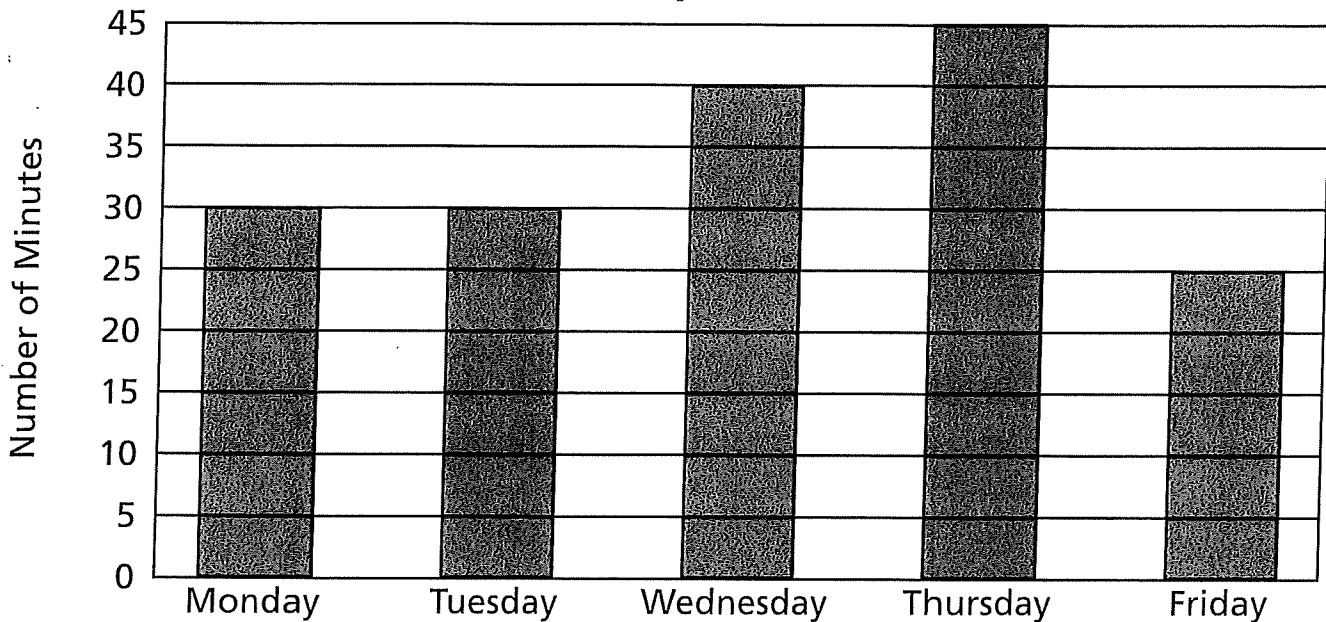
Reading a vertical bar graph

A **bar graph** uses bars to show numerical information.

Alyssa kept track of the amount of time she spent on homework in a week. She recorded the results on a bar graph.



**Time Spent on Homework**



Use the bar graph to answer the questions.


- A.** How many minutes did Alyssa spend on homework on Wednesday? \_\_\_\_\_
- B.** How many minutes did Alyssa spend on homework on Thursday? \_\_\_\_\_
- C.** On which two days did she spend the same amount of time on homework?  
\_\_\_\_\_
- D.** On which day did she spend the most time doing homework? \_\_\_\_\_
- E.** On which day did she spend 25 minutes on homework? \_\_\_\_\_
- F.** How much more time did she spend doing homework on Wednesday than on Friday? \_\_\_\_\_
- G.** How much time did Alyssa spend doing homework altogether during the week?  
\_\_\_\_\_

Name \_\_\_\_\_

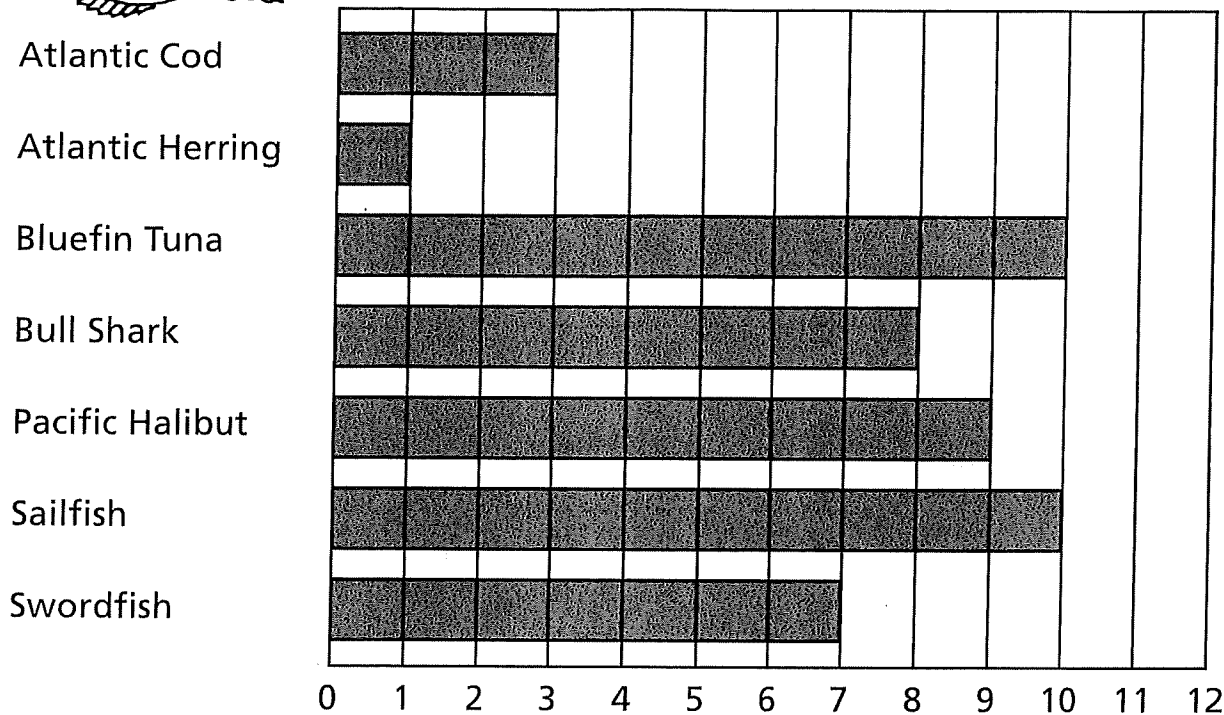

# Fishy Comparisons

Reading a horizontal bar graph

The bar graph below compares the lengths of some fish that live in the ocean.




Fish Lengths in Feet



Use the bar graph to answer the questions.

- A.** Which fish is the smallest? \_\_\_\_\_  
How long is it? \_\_\_\_\_
- B.** How long is a bull shark? \_\_\_\_\_
- C.** Which is longer—a swordfish or a sailfish? \_\_\_\_\_
- D.** Which is longer—a bluefin tuna or a bull shark? \_\_\_\_\_
- E.** How many feet longer is a Pacific halibut than an Atlantic cod? \_\_\_\_\_
- F.** Which two fish are the same length? \_\_\_\_\_
- G.** Which fish are longer than 7 feet? \_\_\_\_\_  
\_\_\_\_\_



# Hot or Not?

A thermometer is used to measure the temperature. Liquid in a thermometer rises or falls to show us how hot or cold it is.

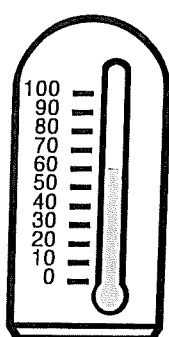





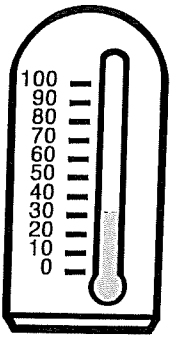
When a thermometer reads 32°F water can freeze. This is the temperature that produces snow!

Read each thermometer.

Write the temperature on the line.

## Daily High Temperatures

Sunday    Monday    Tuesday    Wednesday    Thursday    Friday    Saturday



\_\_\_\_\_

1. Which day had the lowest temperature? \_\_\_\_\_

2. Which day had the highest temperature? \_\_\_\_\_

3. Which days had the same temperature? \_\_\_\_\_

4. Which day was cold enough for snow? \_\_\_\_\_

5. What was the temperature on Wednesday? \_\_\_\_\_

# Unscramble It

Unscramble each group of letters to find a weather-related word.

1. nria \_\_\_\_\_

5. smort \_\_\_\_\_

2. tslee \_\_\_\_\_

6. darzzlib \_\_\_\_\_

3. obwnair \_\_\_\_\_

7. odtorna \_\_\_\_\_

4. owsn \_\_\_\_\_

8. caenihurr \_\_\_\_\_

Now make a scrambled weather word of your own. See if a friend can unscramble it.

Scrambled Letters: \_\_\_\_\_

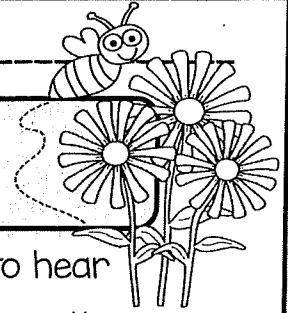
Answer: \_\_\_\_\_





Name \_\_\_\_\_

Date \_\_\_\_\_



# Buzzing Bees!

We know that summer is almost here when we start to hear those buzzing bees. Although many people are afraid of bees, they are very important to have around. Without them, we would not have honey and there would be less fruit and vegetable plants for us to eat.

In the warm weather, we see bees flying among the flowers looking for food. They are collecting nectar and spreading pollen. Nectar is a sweet, sticky liquid that bees use to make honey. Pollen is a powder made by some plants. As bees carry pollen from one flower to another, seeds begin to grow. This is called *pollination*. When a bee finds nectar or pollen, it does a dance for the other bees to let them know where to find the food.

As for those stinging bees, only female bees have stingers. They usually sting when they are trying to protect themselves or their hive. The most common bee, the honeybee, dies soon after stinging. That is because the stinger, which is attached to the bee's abdomen, gets pulled out of the bee's body after getting stuck in the victim's skin.

1. Why are bees important insects? \_\_\_\_\_

2. What is *pollination*? \_\_\_\_\_

3. What happens to a honeybee after it stings? \_\_\_\_\_

Name: \_\_\_\_\_

# Penguins



Here are many penguins. The penguins are black and white. They like the cold. They like the ice. They like the water. They can slide. They can dive. They can swim. The penguins waddle together in a habitat called a rookery.



Highlight 3 things Penguins like. List them below.

---

---

---



Highlight 3 actions the Penguins can do. List them below.

---

---

---



What is a rookery?

The text says a rookery is \_\_\_\_\_

---

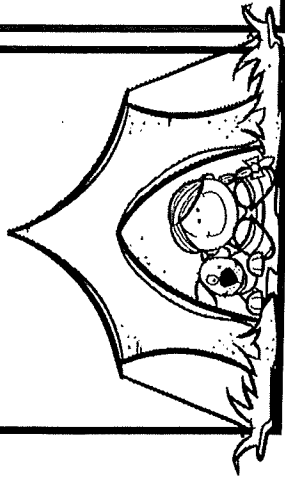
---

---

# Commas In A Series

If you went camping, what are some items you would want to take with you?

Picture



Item 1

Item 2

Item 3

Word Bank

tent  
sleeping bag  
BBQ  
food  
water  
pillow  
flashlight  
games

Write a sentence that tells the three things that you would take with you if you were to go camping.

---

---

---

---

---

---

---

---

---

---

Name: \_\_\_\_\_

# BLEND AND DIAGRAPH

Write a word down that starts with each blend and diagraph. Write it in the box.

sh-

\_\_\_\_\_

ch-

\_\_\_\_\_

th-

\_\_\_\_\_

ch-

\_\_\_\_\_

th-

\_\_\_\_\_

sh-

\_\_\_\_\_

-th

\_\_\_\_\_

-sh

\_\_\_\_\_

-ch

\_\_\_\_\_

-ch

\_\_\_\_\_

-th

\_\_\_\_\_

-sh

\_\_\_\_\_

**Writing a paragraph about: If you lived in an area where it didn't snow, what could you make snowballs out of?**

---

---

---

---

---

---

---

---

---

---